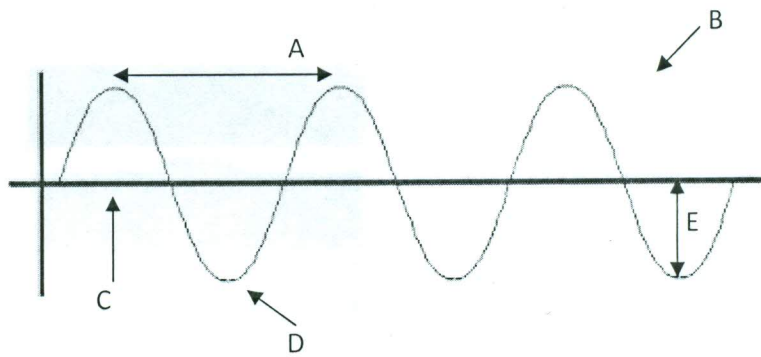


Matching

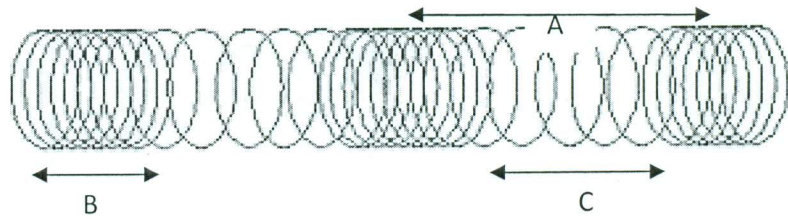
Transverse Wave

- ___ 1. Crest
- ___ 2. Trough
- ___ 3. Wavelength
- ___ 4. Amplitude
- ___ 5. Resting Position



Longitudinal Wave

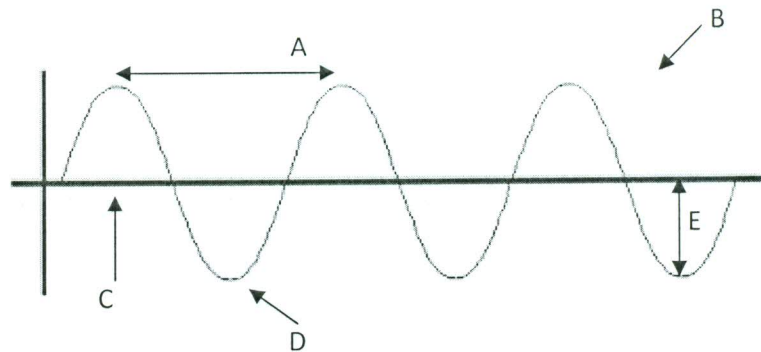
- ___ 6. Compression
- ___ 7. Rarefaction
- ___ 8. Wavelength



Matching

Transverse Wave

- ___ 1. Crest
- ___ 2. Trough
- ___ 3. Wavelength
- ___ 4. Amplitude
- ___ 5. Resting Position



Longitudinal Wave

- ___ 6. Compression
- ___ 7. Rarefaction
- ___ 8. Wavelength

